


$$[a, b] \xrightarrow{\quad} S \xrightarrow{\quad} \mathbb{R}^2$$

$$t \xrightarrow{\quad} (x(t), y(t))$$

$$\omega = A(x, y) dx + B(x, y) dy$$

$$x_i := x(t_i)$$

$$y_i := y(t_i)$$



$$\int_S \omega =$$

$$= \lim_{\|P\| \rightarrow 0} \sum \left(A(x_i, y_i) \frac{x_i - x_{i-1}}{t_i - t_{i-1}} + B(x_i, y_i) \frac{y_i - y_{i-1}}{t_i - t_{i-1}} \right) (t_i - t_{i-1})$$

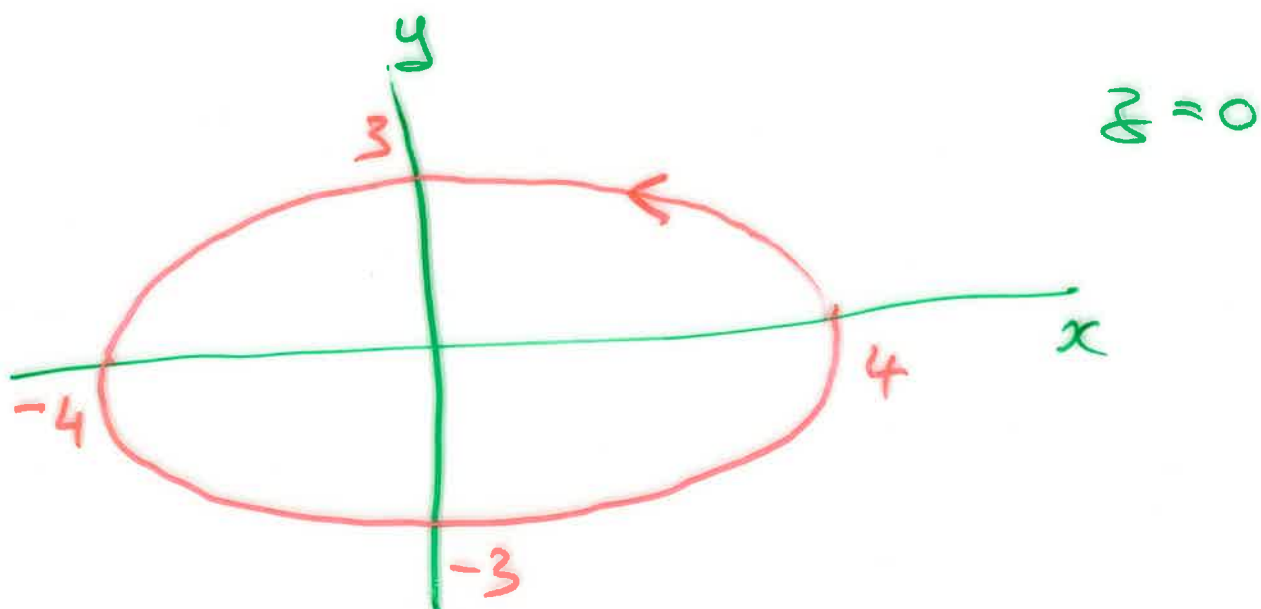
$$= \int_a^b \left(A(x(t), y(t)) \frac{dx}{dt} + B(x(t), y(t)) \frac{dy}{dt} \right) dt$$

"Pull back"

Example work is represented by the 1-form

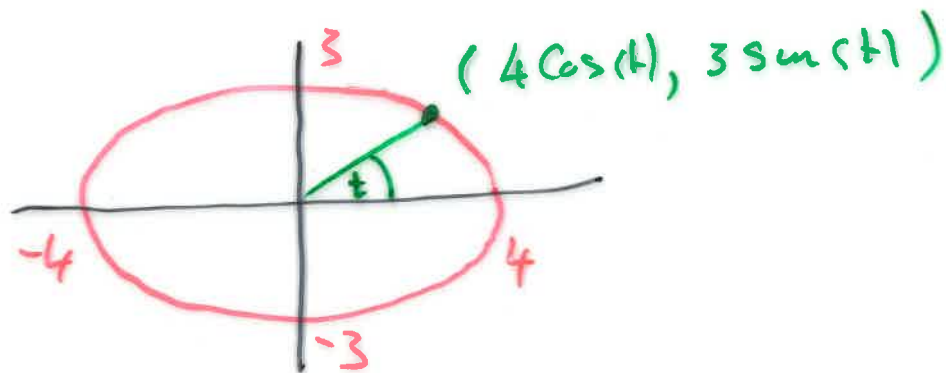
$$W = (3x - 4y + 2z) dx \\ + (4x + 2y - 3z^2) dy \\ + (2xz - 4y^2 + z^3) dz$$

Find the work done in moving a particle once around the following ellipse in the xy -plane, in the anti-clockwise direction.



Solut wir

$$\text{Work} = \int_S (3x - 4y) dx + (4x + 2y) dy$$



$$\begin{aligned} x &= 4 \cos(t) & \frac{dx}{dt} &= -4 \sin t \\ y &= 3 \sin(t) & \frac{dy}{dt} &= 3 \cos(t) \end{aligned}$$

Work =

$$\int_0^{2\pi} - (3(4 \cos t) - 4(3 \sin t)) 4 \sin t + (4(4 \cos t) + 2(3 \sin t)) 3 \cos t \, dt$$

= ...

$$= \int_0^{2\pi} 48 - 30(\sin t)(\cos t) \, dt$$

$$= 48t - 15 \sin^2 t \Big|_0^{2\pi}$$

$$= 96\pi.$$

Stokes' formula

$$\int_{\partial S} \omega = \int_S d\omega$$

where $\omega = f(x_1, x_2, \dots, x_n)$ is a 0-form, and S is a 1-dimensional, oriented, connected region.

- left-hand side makes sense to us.
- for the right-hand side we need to give a meaning to $d\omega$.

We call $d\omega$ the total derivative of ω (also called the exterior derivative)

To define $d\omega$ we need:

Partial Derivatives

Given a 0-form

$$w = f(x, y, z)$$

we denote by

$$\frac{\partial f}{\partial x}$$

the 0-form obtained by regarding y and z as constants, and differentiating f with respect to x . We call $\frac{\partial f}{\partial x}$ the partial

derivative of f with respect to x .

Example Consider

$$w = f(x, y, z) = \sqrt{1 - (x^2 + y^2 + z^2)}$$

defined on

$$D = \{ (x, y, z) \in \mathbb{R}^3, x^2 + y^2 + z^2 \leq 1 \}$$

calculate $\frac{\partial f}{\partial x}$.

Solⁿ $f(x, y, z) = (1 - (x^2 + y^2 + z^2))^{\frac{1}{2}}$

$$\frac{\partial f}{\partial x} = \frac{1}{2} (1 - (x^2 + y^2 + z^2))^{-\frac{1}{2}} (-2x)$$

$$= \frac{-x}{\sqrt{1 - (x^2 + y^2 + z^2)}}$$

Similarly

$$\frac{\partial f}{\partial y} = \frac{-y}{\sqrt{1 - (x^2 + y^2 + z^2)}}$$

$$\frac{\partial f}{\partial z} = \frac{-z}{\sqrt{1 - (x^2 + y^2 + z^2)}}$$

Notation

we often write

f_x

in place of

$$\frac{\partial f}{\partial x}.$$

Defn The total derivative
of the 0-form

$$w = f(x, y, z)$$

is the 1-form

$$dw = f_x dx + f_y dy + f_z dz$$

Example Find the total
derivative dw of

$$w = \sqrt{1 - (x^2 + y^2 + z^2)}$$

Soln

$$dw = f_x dx + f_y dy + f_z dz$$

$$= \frac{-x}{\sqrt{1 - (x^2 + y^2 + z^2)}} dx$$

$$- \frac{y}{\sqrt{1 - (x^2 + y^2 + z^2)}} dy$$

$$- \frac{z}{\sqrt{1 - (x^2 + y^2 + z^2)}} dz$$